



KS3 Mathematics

Homework Pack C:

Level 5

Stafford Burndred

ISBN 1 84070 028 9

ePacks

© Pearson Publishing Limited, 1998
Published by Pearson Publishing, 1998

A licence to copy the material in this pack is only granted to the purchaser strictly within their school, college or organisation. The material must not be reproduced in any other form without the express written permission of Pearson Publishing.

St Josephs Catholic High School

Pearson Publishing, Chesterton Mill, French's Road, Cambridge CB4 3NP Tel 01223 350555 Fax 01223 356484

Web site: <http://www.pearson.co.uk/education/>



1 Multiplying and dividing whole numbers by 10, 100 and 1000 – 1

1 4×60

2 80×300

1.....

3 $240 \div 30$

4 $2800 \div 40$

2.....

3.....

5 70×40

6 20×3000

4.....

5.....

7 $18\ 000 \div 600$

8 $1200 \div 300$

6.....

7.....

9 400×800

10 600×50

8.....

9.....

11 $3200 \div 80$

12 $42\ 000 \div 700$

10.....

11.....

12.....

13 1600 bottles are packed into boxes of 20.
How many boxes are needed?

13.....

14 A ship can carry 90 000 tonnes. It is loaded with
containers. Each container weighs 300 tonnes.
How many containers can be carried?

14.....

15 A van is loaded with 300 boxes. Each box weighs
20 kilograms. What is the total weight of the boxes?

15.....

16 Matches are sold in boxes of 50. How many
boxes are needed for 30 000 matches?

16.....

17 4800 kilograms of potatoes are placed in sacks.
Each sack contains 60 kilograms.
How many sacks are required?

17.....

18 Mrs Giles has 400 chickens. Each chicken lays 10 eggs.
How many eggs are laid?

18.....

19 A school has 40 classes with 30 pupils in each class.
How many pupils does the school have?

19.....

20 Farmer Giles has 1600 pigs. He puts them
into fields. Each field holds 200 pigs.
How many fields are needed?

20.....

Minimum mark

16	13	10	7	
A	B	C	D	E

Circle grade

20



2 Multiplying and dividing decimals by 10, 100 and 1000 – 2

1 3.8×10

2 6.27×100

1.....

3 $2.53 \div 10$

4 $68.2 \div 100$

2.....

3.....

5 4.71×10

6 6.32×1000

4.....

5.....

7 $482 \div 1000$

8 $3.61 \div 100$

6.....

7.....

9 30.2×100

10 48.6×10

8.....

9.....

11 $2.7 \div 10$

12 $5.73 \div 1000$

10.....

11.....

13 $27.4 \div 100$

14 6.83×1000

12.....

13.....

15 0.037×10

16 0.052×100

14.....

15.....

17 $6 \div 10$

18 3.71×1000

16.....

17.....

19 $18.2 \div 1000$

20 $5 \div 100$

18.....

19.....

21 3.61×100

22 $0.273 \div 10$

20.....

21.....

23 $0.2 \div 100$

24 0.38×1000

22.....

23.....

24.....

Minimum mark

19	16	12	8	
A	B	C	D	E

Circle grade

24



3 Multiplying and dividing decimals by 10, 100 and 1000 – 3

Choose the correct answers for these questions:

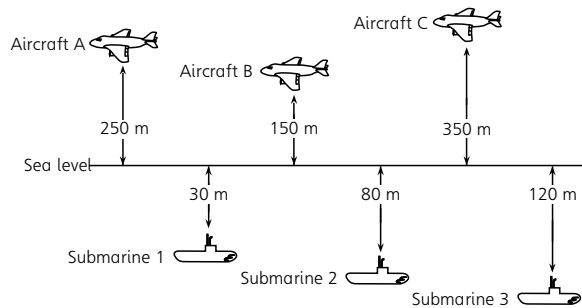
- | | | | | | |
|----|--|-----------|---------|------------|------------------------------------|
| 1 | 38.2 ÷ 100 | a 3.82 | b 0.382 | c 38.20 | 1..... <input type="checkbox"/> |
| 2 | 5.2 x 100 | a 5.200 | b 52 | c 520 | 2..... <input type="checkbox"/> |
| 3 | 4.6 ÷ 1000 | a 0.46 | b 0.046 | c 0.0046 | 3..... <input type="checkbox"/> |
| 4 | 6.3 x 10 | a 60.30 | b 6.30 | c 63 | 4..... <input type="checkbox"/> |
| 5 | 82 ÷ 1000 | a 82 000 | b 0.082 | c 0.82 | 5..... <input type="checkbox"/> |
| 6 | 0.284 x 1000 | a 284 | b 28.4 | c 0.284000 | 6..... <input type="checkbox"/> |
| 7 | 0.62 ÷ 10 | a 0.062 | b 6.2 | c 620 | 7..... <input type="checkbox"/> |
| 8 | 0.03 x 1000 | a 0.03000 | b 3 | c 30 | 8..... <input type="checkbox"/> |
| 9 | A loaf of bread weighs 1.5 kilograms. What is the weight of 100 loaves? | | | | 9.....kg <input type="checkbox"/> |
| 10 | A man can walk 6.3 kilometres in one hour. How far can he walk in 10 hours? | | | | 10.....km <input type="checkbox"/> |
| 11 | Farmer Giles has 0.1 tonnes of potatoes. The potatoes are placed in 10 sacks. What weight of potatoes is in each sack? | | | | 11t <input type="checkbox"/> |
| 12 | A bottle of wine contains 1.25 litres. How much wine is needed to fill 100 bottles? | | | | 12.....l <input type="checkbox"/> |
| 13 | A glass contains 0.32 litres. How many litres are needed to fill 1000 glasses? | | | | 13.....l <input type="checkbox"/> |
| 14 | 7.2 tonnes of sand is divided between 10 people. How much does each receive? | | | | 14t <input type="checkbox"/> |
| 15 | 3260 tonnes of sand is loaded into 100 lorries. How much sand is in each lorry? | | | | 15t <input type="checkbox"/> |
| 16 | 6 kilograms of oranges are shared between 10 people. How much does each receive? | | | | 16.....kg <input type="checkbox"/> |

Minimum mark	13	11	8	5	
Circle grade	A	B	C	D	E

 16



4 Ordering, adding and subtracting negative numbers



- 1 What is the difference in height between Aircraft A and:
- | | | |
|----------------|----------------|------------------------------------|
| a Aircraft B? | b Submarine 1? | 1am <input type="checkbox"/> |
| | | 1b.....m <input type="checkbox"/> |
| c Submarine 2? | d Submarine 3? | 1c.....m <input type="checkbox"/> |
| | | 1dm <input type="checkbox"/> |

- 2 What is the difference in height between Submarine 2 and:
- | | | |
|----------------|----------------|------------------------------------|
| a Submarine 1? | b Submarine 3? | 2am <input type="checkbox"/> |
| | | 2b.....m <input type="checkbox"/> |
| c Aircraft B? | d Aircraft C? | 2c.....m <input type="checkbox"/> |
| | | 2dm <input type="checkbox"/> |

What are the heights of these aircraft above sea level?

- | | |
|---|---------------------------------|
| 3 Aircraft D is 50 m below Aircraft B | 3..... <input type="checkbox"/> |
| 4 Aircraft E is 50 m above Submarine 1 | 4..... <input type="checkbox"/> |
| 5 Aircraft F is 700 m above Submarine 2 | 5..... <input type="checkbox"/> |
| 6 Aircraft G is 350 m above Submarine 3 | 6..... <input type="checkbox"/> |

What are the depths of these submarines below sea level?

- | | |
|--|----------------------------------|
| 7 Submarine 4 is 300 m below Aircraft A | 7..... <input type="checkbox"/> |
| 8 Submarine 5 is 60 m below Submarine 2 | 8..... <input type="checkbox"/> |
| 9 Submarine 6 is 10 m above Submarine 3 | 9..... <input type="checkbox"/> |
| 10 Submarine 7 is 480 m below Aircraft C | 10..... <input type="checkbox"/> |

Place the following lists of numbers in order of size, smallest first:

- | | | |
|-------------------|-----------------|----------------------------------|
| 11 -3, 8, -1, -4 | 12 2, 0, -3, -4 | 11..... <input type="checkbox"/> |
| | | 12..... <input type="checkbox"/> |
| 13 -8, -6, -1, -4 | 14 0, -3, 7, -5 | 13..... <input type="checkbox"/> |
| | | 14..... <input type="checkbox"/> |

Minimum mark	16	13	10	7	
Circle grade	A	B	C	D	E

_____ / 20



5 Addition, subtraction, multiplication and division of decimals

1 43.8
 2.67
+ 0.18

2 68.37
 2.18
+ 17.06

1.....

2.....

3 4.88
- 3.64

4 5.73
- 1.39

3.....

4.....

5 27.28
- 11.79

6 6.8
- 1.93

5.....

6.....

7 2.63
x 8

8 5.7
x 0.03

7.....

8.....

9 4.05
x 0.07

10 25.6
x 0.04

9.....

10.....

11 15.3
x 0.2

12 7.63
x 4

11.....

12.....

13 0.4 $\overline{)36}$

14 0.7 $\overline{)4.34}$

13.....

14.....

15 0.03 $\overline{)1.275}$

16 5 $\overline{)6.8}$

15.....

16.....

17 38 + 7.6 + 3.28

17.....

18 6.8 - 0.37

18.....

19 2.72 x 0.2

19.....

20 8 ÷ 0.4

20.....

Minimum mark

16	13	10	7	
A	B	C	D	E

Circle grade

20


6 Calculating fractional and percentage parts – 1

- | | | | |
|----|-------------------------------|----------|--------------------------|
| 1 | Find $\frac{5}{8}$ of 3 m | 1 | <input type="checkbox"/> |
| 2 | Find $\frac{2}{3}$ of 4.5 kg | 2 | <input type="checkbox"/> |
| 3 | Find $\frac{4}{5}$ of 700 g | 3 | <input type="checkbox"/> |
| 4 | Find $\frac{7}{8}$ of 3 l | 4 | <input type="checkbox"/> |
| 5 | Find $\frac{3}{10}$ of 55 km | 5 | <input type="checkbox"/> |
| 6 | Find $\frac{7}{16}$ of 120 g | 6 | <input type="checkbox"/> |
| 7 | Find $\frac{3}{20}$ of 400 ml | 7 | <input type="checkbox"/> |
| 8 | Find $\frac{1}{8}$ of 1 kg | 8 | <input type="checkbox"/> |
| 9 | Find 10% of 30 | 9 | <input type="checkbox"/> |
| 10 | Find 5% of 18 | 10 | <input type="checkbox"/> |
| 11 | Find 20% of 72 | 11 | <input type="checkbox"/> |
| 12 | Find 15% of 12 | 12 | <input type="checkbox"/> |
| 13 | Find 25% of 61 | 13 | <input type="checkbox"/> |
| 14 | Find 35% of 18 | 14 | <input type="checkbox"/> |
| 15 | Find 70% of 3 | 15 | <input type="checkbox"/> |
| 16 | Find 62% of 230 | 16 | <input type="checkbox"/> |
| 17 | Find 71% of 600 | 17 | <input type="checkbox"/> |
| 18 | Find 37% of 270 | 18 | <input type="checkbox"/> |
| 19 | Find 23% of 18 | 19 | <input type="checkbox"/> |
| 20 | Find 6% of 120 | 20 | <input type="checkbox"/> |

Minimum mark	16	13	10	7	
Circle grade	A	B	C	D	E

20

7 Calculating fractional and percentage parts – 2



- 1 In a sale a discount of 30% is given.
What is the discount on these items?
- | | | |
|-------------------|----------------------|-------------------------------------|
| a Gloves at £7.20 | b Trousers at £18.40 | 1a £ <input type="checkbox"/> |
| | | 1b £ <input type="checkbox"/> |
| c Socks at £3.50 | d Hat at £16.80 | 1c £ <input type="checkbox"/> |
| | | 1d £ <input type="checkbox"/> |
- 2 The price of cars increases by 12%.
What is the increase on these cars?
- | | | |
|-----------|-----------|-------------------------------------|
| a £12 000 | b £18 000 | 2a £ <input type="checkbox"/> |
| | | 2b £ <input type="checkbox"/> |
| c £23 000 | d £7000 | 2c £ <input type="checkbox"/> |
| | | 2d £ <input type="checkbox"/> |
- 3 A 15% service charge is added to the cost of meals in a restaurant. Calculate the service charge for these meals:
- | | | |
|----------|----------|-------------------------------------|
| a £18 | b £32 | 3a £ <input type="checkbox"/> |
| | | 3b £ <input type="checkbox"/> |
| c £14.60 | d £27.20 | 3c £ <input type="checkbox"/> |
| | | 3d £ <input type="checkbox"/> |
- 4 A garage gives a discount of $2\frac{1}{2}\%$ for cash.
Work out the discount in these bills:
- | | | |
|--------|--------|-------------------------------------|
| a £200 | b £320 | 4a £ <input type="checkbox"/> |
| | | 4b £ <input type="checkbox"/> |
| c £168 | d £426 | 4c £ <input type="checkbox"/> |
| | | 4d £ <input type="checkbox"/> |
- 5 $17\frac{1}{2}\%$ VAT is added to the following prices.
Calculate the VAT:
- | | | |
|--------|--------|-------------------------------------|
| a £180 | b £224 | 5a £ <input type="checkbox"/> |
| | | 5b £ <input type="checkbox"/> |
| c £368 | d £430 | 5c £ <input type="checkbox"/> |
| | | 5d £ <input type="checkbox"/> |
- 6 Prices in a shop are reduced by $\frac{1}{5}$.
Calculate the reductions on these prices:
- | | | |
|----------|----------|-------------------------------------|
| a £8 | b £13.40 | 6a £ <input type="checkbox"/> |
| | | 6b £ <input type="checkbox"/> |
| c £12.60 | d £18.75 | 6c £ <input type="checkbox"/> |
| | | 6d £ <input type="checkbox"/> |



Minimum mark	19	16	12	8	
Circle grade	A	B	C	D	E

24



8 Long multiplication and division without a calculator

1
$$\begin{array}{r} 537 \\ \times 68 \\ \hline \end{array}$$

2
$$\begin{array}{r} 283 \\ \times 47 \\ \hline \end{array}$$

1.....

3
$$\begin{array}{r} 482 \\ \times 47 \\ \hline \end{array}$$

4
$$\begin{array}{r} 526 \\ \times 39 \\ \hline \end{array}$$

2.....

3.....

4.....

5
$$\begin{array}{r} 684 \\ \times 27 \\ \hline \end{array}$$

6
$$\begin{array}{r} 298 \\ \times 73 \\ \hline \end{array}$$

5.....

6.....

7
$$18 \overline{)817}^r$$

8
$$19 \overline{)529}^r$$

7.....

8.....

9
$$27 \overline{)903}^r$$

10
$$63 \overline{)874}^r$$

9.....

10.....

11
$$31 \overline{)483}^r$$

12
$$39 \overline{)823}^r$$

11.....

12.....

13 A bus can carry 47 passengers.

a How many buses are required to carry 1222 passengers?

13.....

b How many buses are required to carry 893 passengers?

14.....

c How many passengers can 27 buses carry?

15.....

d How many passengers can 83 buses carry?

16.....

14 A machine can produce 473 nails in one hour.

a How many nails can it produce in 18 hours?

17.....

b How many nails can it produce in 27 hours?

18.....

15 A school hall has 1497 chairs.

a They are placed in rows of 18. How many rows are there and how many chairs are left over?

19.....r.....

b They are placed in rows of 22. How many rows are there and how many chairs are left over?

20.....r.....

Minimum mark

16	13	10	7	
A	B	C	D	E

Circle grade

20



9 Checking and estimating – 1

Check the following sums. If the answer is correct write 'Correct' in the answer space. If the answer is wrong, write the answer you get in the answer column.

$$\begin{array}{r} 1 \quad 372 \\ + 639 \\ \hline 1011 \end{array}$$

$$\begin{array}{r} 2 \quad 427 \\ + 316 \\ \hline 7313 \end{array}$$

1.....

2.....

$$\begin{array}{r} 3 \quad 708 \\ - 319 \\ \hline 389 \end{array}$$

$$\begin{array}{r} 4 \quad 897 \\ - 368 \\ \hline 531 \end{array}$$

3.....

4.....

$$\begin{array}{r} 5 \quad 573 \\ + 648 \\ \hline 1221 \end{array}$$

$$\begin{array}{r} 6 \quad 437 \\ - 178 \\ \hline 341 \end{array}$$

5.....

6.....

Fill in the missing rows of numbers:

$$\begin{array}{r} 7 \quad 638 \\ + \dots \\ \hline 1347 \end{array}$$

$$\begin{array}{r} 8 \quad 1364 \\ - \dots \\ \hline 927 \end{array}$$

7.....

8.....

$$\begin{array}{r} 9 \quad \dots \\ + 536 \\ \hline 803 \end{array}$$

$$\begin{array}{r} 10 \quad 861 \\ - \dots \\ \hline 352 \end{array}$$

9.....

10.....

$$\begin{array}{r} 11 \quad 293 \\ + \dots \\ \hline 917 \end{array}$$

$$\begin{array}{r} 12 \quad \dots \\ - 864 \\ \hline 178 \end{array}$$

11.....

12.....

Minimum mark	10	8	6	4	
Circle grade	A	B	C	D	E

_____ 12



10 Checking and estimating – 2

Estimate the cost of the following.

You must show your working:

- | | | |
|----|---|-------------------------------------|
| 1 | 899 books at £8.95 each | 1 £ <input type="checkbox"/> |
| 2 | 603 boxes of chalk at £0.49 | 2 £ <input type="checkbox"/> |
| 3 | 29 m ² of carpet at £7.95 per m ² | 3 £ <input type="checkbox"/> |
| 4 | 71 bottles of wine at £3.95 each | 4 £ <input type="checkbox"/> |
| 5 | 68 books at £6.10 each | 5 £ <input type="checkbox"/> |
| 6 | 81 rulers at £0.28 | 6 £ <input type="checkbox"/> |
| 7 | 19 litres of petrol at 89p per litre | 7 £ <input type="checkbox"/> |
| 8 | 598 chairs at £29.95 | 8 £ <input type="checkbox"/> |
| 9 | 21 tables at £19.95 | 9 £ <input type="checkbox"/> |
| 10 | 198 stools at £18.10 | 10 £ <input type="checkbox"/> |
| 11 | 4987 pencils at £0.11 | 11 £ <input type="checkbox"/> |
| 12 | 21 umbrellas at £4.99 | 12 £ <input type="checkbox"/> |
| 13 | 72 cans of cola at £0.28 | 13 £ <input type="checkbox"/> |
| 14 | 393 nails at £0.02 | 14 £ <input type="checkbox"/> |
| 15 | 48 glasses at £0.52 | 15 £ <input type="checkbox"/> |
| 16 | 203 cups at £0.39 | 16 £ <input type="checkbox"/> |

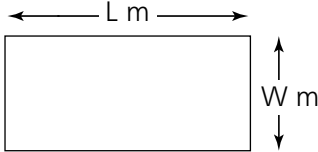
Minimum mark	13	11	8	5	
Circle grade	A	B	C	D	E

_____ 16

11 Writing in algebra

- 1 John is C cm tall. Peter is 5 cm taller.
How tall is Peter? 1.....
- 2 Carolyn has L lemons. She eats 2.
How many are left? 2.....
- 3 Adam has B books. Sally has Y books.
How many do they have altogether? 3.....
- 4 Four boys earned £Y between them for washing
a car. They divided the money equally.
How much did each earn? 4 £
- 5 A bread roll costs Y pence. What is the cost of
8 bread rolls? 5.....p
- 6 Mrs Watson buys 3 kg of cheese at £y per kilogram.
 - a What is the total cost in £'s? 6a £
 - b What is the total cost in pence? 6b.....p
- 7 Andrea bought X sweets. She ate Y sweets.
How many sweets were left? 7.....
- 8 Here is a room:

It is L m long and
W m wide.



 - a What is the perimeter? 8am
 - b What is the area? 8bm²


The room is H m high.

 - c What is the volume? 8cm³
- 9 Y apples are shared between B boys.
How many apples does each boy receive? 9.....

Minimum mark	10	8	6	4	
Circle grade	A	B	C	D	E

12

12 Using algebra – 1



- 1 A is 6 more than B.
 - a What is the value of A when B is 8? 1a
 - b What is the value of A when B is -3? 1b.....
 - c What is the value of B when A is 10? 1c.....
 - d What is the value of B when A is -10? 1d

- 2 I think of a number, I double it and add 5.
The answer is 29. What number did I think of? 2.....

- 3 The difference between two numbers is 12.
The smaller number is 17. What is the larger number? 3.....

- 4 If I divide N by 4 the answer is 6.
What is the value of N? 4.....

- 5 A is 3 more than B. B is half of C.
 - a If C is 8, what is A? 5a
 - b If A is 17, what is C? 5b.....

- 6 If I take-away 5 from Y the answer is 6.
What is the value of Y? 6.....


- 7 If I multiply M by 6 the answer is 48.
What is the value of M? 7.....

- 8 C is half of A. A is half of H.
If H is 8, what is the value of C? 8.....



Minimum mark	10	8	6	4		_____
Circle grade	A	B	C	D	E	12

13 Using algebra – 2



Given $a = 1$, $b = 2$, $c = 3$, $d = 4$, find the values of:

- | | | |
|-------------------|---------------|----------------------------------|
| 1 $a + c$ | 2 $2a$ | 1..... <input type="checkbox"/> |
| | | 2..... <input type="checkbox"/> |
| 3 $3d$ | 4 abc | 3..... <input type="checkbox"/> |
| | | 4..... <input type="checkbox"/> |
| 5 $bd + ac$ | 6 $3ab$ | 5..... <input type="checkbox"/> |
| | | 6..... <input type="checkbox"/> |
| 7 $\frac{1}{2}cd$ | 8 $3c + 2a$ | 7..... <input type="checkbox"/> |
| | | 8..... <input type="checkbox"/> |
| 9 $d(a + b + c)$ | 10 $c(a + b)$ | 9..... <input type="checkbox"/> |
| | | 10..... <input type="checkbox"/> |

$A = B - C$

- | | |
|--------------------------------------|----------------------------------|
| 11 Find A when $B = 8$ and $C = 2$ | 11..... <input type="checkbox"/> |
| 12 Find A when $B = 3$ and $C = 5$ | 12..... <input type="checkbox"/> |
| 13 Find B when $A = 10$ and $C = 3$ | 13..... <input type="checkbox"/> |
| 14 Find B when $A = 4$ and $C = 7$ | 14..... <input type="checkbox"/> |
| 15 Find C when $A = 12$ and $B = 23$ | 15..... <input type="checkbox"/> |
| 16 Find C when $A = -3$ and $B = 8$ | 16..... <input type="checkbox"/> |

The formula $A = \frac{1}{2}BH$ can be used to find the area of a triangle, where A is the area, B is the base and H is the height. Use the formula to find A when:


- | | |
|---------------------|----------------------------------|
| 17 $B = 3$ $H = 4$ | 17..... <input type="checkbox"/> |
| 18 $B = 6$ $H = 4$ | 18..... <input type="checkbox"/> |
| 19 $B = 12$ $H = 8$ | 19..... <input type="checkbox"/> |
| 20 $B = 11$ $H = 5$ | 20..... <input type="checkbox"/> |



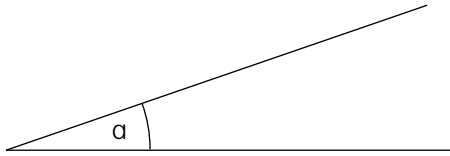
Minimum mark	16	13	10	7	
Circle grade	A	B	C	D	E

_____ 20

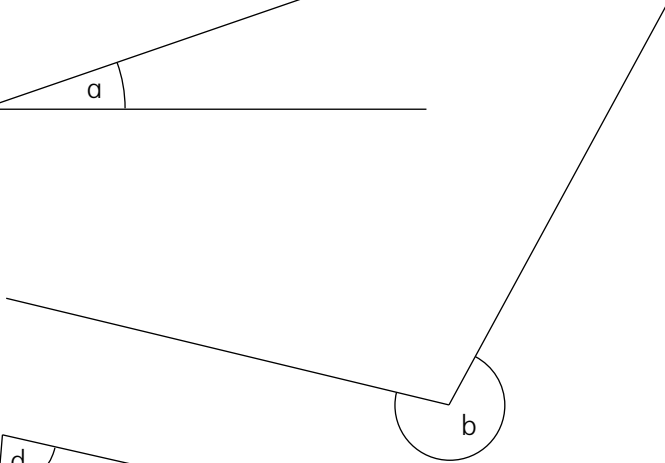
14 Using a protractor



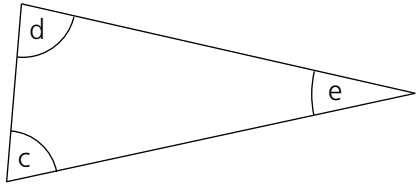
Measure each angle:



a =



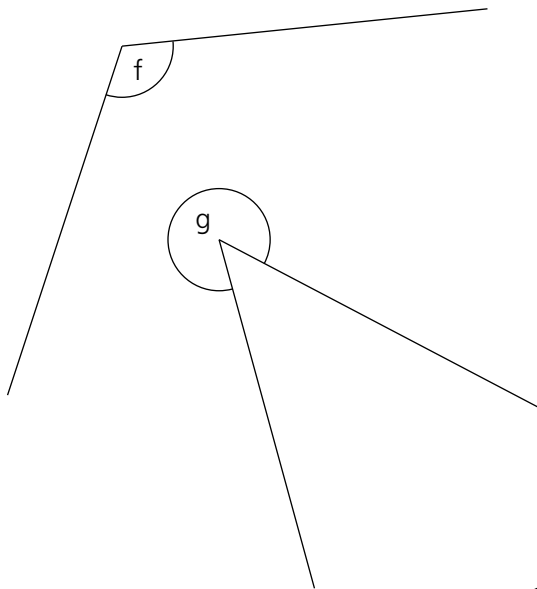
b =



c =

d =

e =



f =

g =


h =



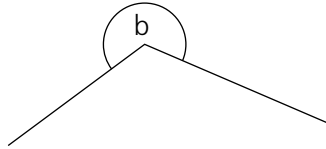

Minimum mark	7	5	4	2	
Circle grade	A	B	C	D	E

_____ / 8

15 Angles

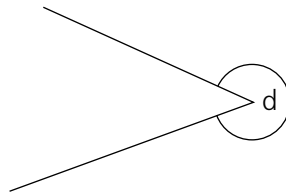
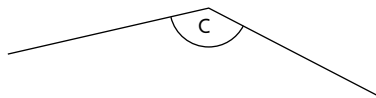


Give the special names of these angles:



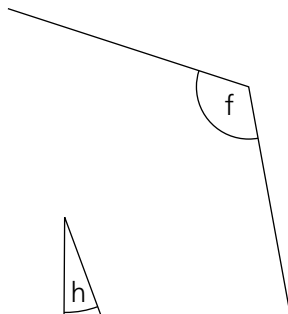
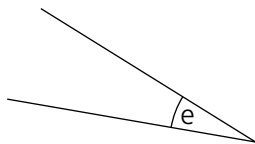
a=.....

b=.....



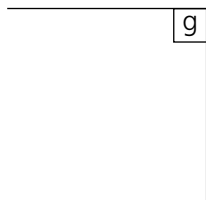
c=.....

d=.....



e=.....

f=.....



g=.....


h=.....



Minimum mark	7	5	4	2	
Circle grade	A	B	C	D	E


_____ / 8

16 Symmetry of 2-D shapes - 1



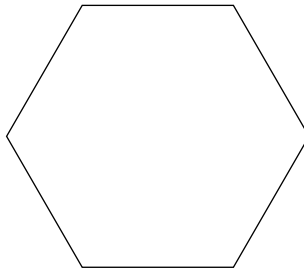
- a Draw the axis of symmetry on these shapes.
- b Name the shapes.

1a



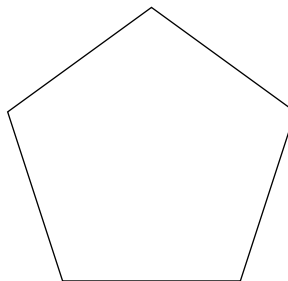
1b.....

2a



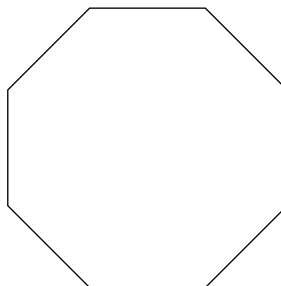
2b.....

3a



3b.....

4a



4b.....




Minimum mark
Circle grade

7	5	4	2	
A	B	C	D	E

_____ / 8

17 Symmetry of 2-D shapes – 2

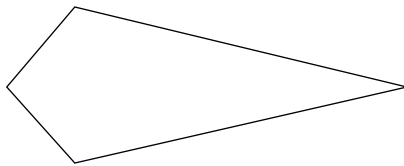


Use dotted lines to draw the axis of symmetry on these shapes. If a shape does not have any axes of symmetry write 'none' in the shape.


1 Rectangle



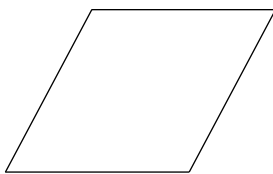
2 Kite



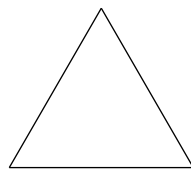
3 Parallelogram



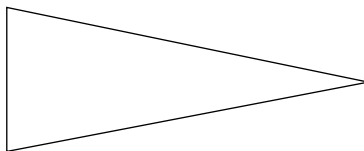
4 Rhombus



5 Equilateral triangle



6 Isosceles triangle






Minimum mark	5	4	3	2	
Circle grade	A	B	C	D	E

6

18 Rough metric equivalents of imperial units



Here are some measurements given in imperial units.
Convert the imperial units to metric units.

- 1 A ruler is 12 inches long.
What is this in centimetres? 1.....cm

- 2 A book weighs 2 pounds.
What is this in kilograms? 2.....kg

- 3 The distance from London to Inverness is 500 miles.
What is this in kilometres? 3.....km

- 4 Mr Smith put 10 gallons of petrol in his car.
How many litres was this? 4.....l

- 5 Amy is 5 feet tall. What is this in centimetres?
(12 inches = 1 foot) 5.....cm

- 6 Paul is 6 feet tall. Alan is 2 metres tall.
Who is taller? 6.....

- 7 Joanne drinks a pint of milk.
Debra drinks a litre of milk.
Who drinks more? 7.....

- 8 A baby weighs 8 pounds.
What is this in kilograms? 8.....kg



Minimum mark	7	5	4	2	
Circle grade	A	B	C	D	E

_____ 8

19 Converting one metric unit to another

- | | | |
|----|--|------------------------------------|
| 1 | Convert 38 millimetres into centimetres | 1.....cm <input type="checkbox"/> |
| 2 | Convert 225 centimetres into metres | 2.....m <input type="checkbox"/> |
| 3 | Convert 2308 grams into kilograms | 3.....kg <input type="checkbox"/> |
| 4 | Convert 3.6 tonnes into kilograms | 4.....kg <input type="checkbox"/> |
| 5 | Convert 2.6 centimetres into millimetres | 5.....mm <input type="checkbox"/> |
| 6 | Convert 128 centilitres into litres | 6.....l <input type="checkbox"/> |
| 7 | Convert 0.8 litres into millilitres | 7.....ml <input type="checkbox"/> |
| 8 | Convert 0.4 metres into centimetres | 8.....cm <input type="checkbox"/> |
| 9 | Convert 3.26 kilograms into grams | 9.....g <input type="checkbox"/> |
| 10 | Convert 35 millilitres into centilitres | 10.....cl <input type="checkbox"/> |
| 11 | Write 350 metres in kilometres | 11.....km <input type="checkbox"/> |
| 12 | Write 1.08 litres in centilitres | 12.....cl <input type="checkbox"/> |
| 13 | Write 285 kilograms in tonnes | 13.....t <input type="checkbox"/> |
| 14 | Write 1.3 kilometres in metres | 14.....m <input type="checkbox"/> |
| 15 | Write 70 grams in kilograms | 15.....kg <input type="checkbox"/> |
| 16 | Write 6.2 centilitres in millilitres | 16.....ml <input type="checkbox"/> |
| 17 | Write 0.07 tonnes in kilograms | 17.....kg <input type="checkbox"/> |
| 18 | Write 1.2 metres in millimetres | 18.....mm <input type="checkbox"/> |
| 19 | Write 0.05 litres in millilitres | 19.....ml <input type="checkbox"/> |
| 20 | Write 32.8 millimetres in centimetres | 20.....cm <input type="checkbox"/> |

Minimum mark	16	13	10	7	
Circle grade	A	B	C	D	E

_____ / 20

20 Making sensible estimates

Estimate the following using metric units.
You **must** state the unit, eg kilometres.

- | | | | |
|---|--|--------|--------------------------|
| 1 | The capacity of a can of cola | 1..... | <input type="checkbox"/> |
| 2 | The weight of a cat | 2..... | <input type="checkbox"/> |
| 3 | Your height | 3..... | <input type="checkbox"/> |
| 4 | Your weight | 4..... | <input type="checkbox"/> |
| 5 | The weight of this worksheet | 5..... | <input type="checkbox"/> |
| 6 | The height of your maths classroom | 6..... | <input type="checkbox"/> |
| 7 | The length of your maths classroom | 7..... | <input type="checkbox"/> |
| 8 | The height of the door in your maths classroom | 8..... | <input type="checkbox"/> |

Which metric unit would you use to measure the following?

- | | | | |
|----|--------------------------------------|---------|--------------------------|
| 9 | The weight of a lorry | 9..... | <input type="checkbox"/> |
| 10 | The weight of a suitcase | 10..... | <input type="checkbox"/> |
| 11 | The length of a mouse | 11..... | <input type="checkbox"/> |
| 12 | The distance from London to New York | 12..... | <input type="checkbox"/> |
| 13 | The capacity of a glass | 13..... | <input type="checkbox"/> |
| 14 | The capacity of a swimming pool | 14..... | <input type="checkbox"/> |
| 15 | The height of a block of flats | 15..... | <input type="checkbox"/> |
| 16 | The length of a flea | 16..... | <input type="checkbox"/> |

Minimum mark	13	11	8	5	
Circle grade	A	B	C	D	E

16

21 Mean and range – 1



Find a the range
 b the mean
 of the following lists of numbers:

1 6, 2, 4, 5

1a

1b.....

2 7, 3, 8, 2, 12

2a

2b.....

3 18, 27, 31, 16, 42

3a

3b.....

4 223, 428, 617, 529, 183

4a

4b.....

5 27, 13, 18, 20, 25, 27, 32, 47

5a

5b.....

6 16, 16, 81, 43, 28, 19, 36, 26, 39, 27

6a

6b.....

7 30, 62, 81, 43, 28, 19, 36, 26, 39, 27

7a

7b.....

8 3.6, 2.4, 1.7, 3.2, 5.6

8a

8b.....

9 13.8, 7.9, 27.6, 43.8

9a

9b.....

10 The number of pupils attending a school in one week were: 287, 312, 298, 306, 308

10a

10b.....

11 The number of people attending a cinema on 8 consecutive days were:
 203, 173, 160, 158, 137, 175, 162, 168

11a

11b.....

12 The number of pupils in ten classrooms were:
 27, 28, 30, 26, 22, 28, 24, 26, 21, 30

12a

12b.....



Minimum mark	19	16	12	8	
Circle grade	A	B	C	D	E

24

22 Mean and range – 2

- 1 This table shows the number of loaves of bread delivered to some houses in a street:

Loaves of bread	0	1	2	3	4
Number of houses	3	5	4	3	1

Find the mean number of loaves per house.

1.....

- 2 This table shows the number of goals scored by a football team during 20 games:

Number of goals	0	1	2	3	4	5
Number of games	2	3	6	5	3	1

Find the mean number of goals per game.

2.....

- 3 The mean age of four men in a pop group was 21. Another man aged 27 joined the group. What is the mean age of the five men?

3.....

- 4 The mean age of five women in a room was 32. One woman aged 35 left the room. What is the mean age of the four women left in the room?

4.....

- 5 The mean age of eight people in a room was 28. Two more people aged 29 and 34 enter the room. What is the mean age of the people in the room?

5.....

Minimum mark	4	3	2	1	
Circle grade	A	B	C	D	E

5

23 Comparing two sets of data

- 1 This table shows the marks (out of 50) obtained in some tests by two pupils:

Anna	28	36	41	36	29	30	29	32
Barry	11	48	18	49	21	16	15	27

Use the range and mean to decide which pupil is better.

Use this information to compare the results.

Comparison

.....

.....

.....

.....

Anna

Range

Mean

Barry

Range

Mean

Comparison

- 2 This table shows the time taken by 10 boys and 8 girls to thread a needle. The time is in seconds:

Boys					Girls			
48	83	32	3	18	3	18	11	16
2	53	64	18	23	21	5	4	10

Use the range, median and mean to compare the times taken by the boys and girls.

Use your findings to compare the boys and girls.

Comparison

.....

.....

.....

.....

Boys

Range

Median

Mean

Girls

Range

Median


Mean

Comparison

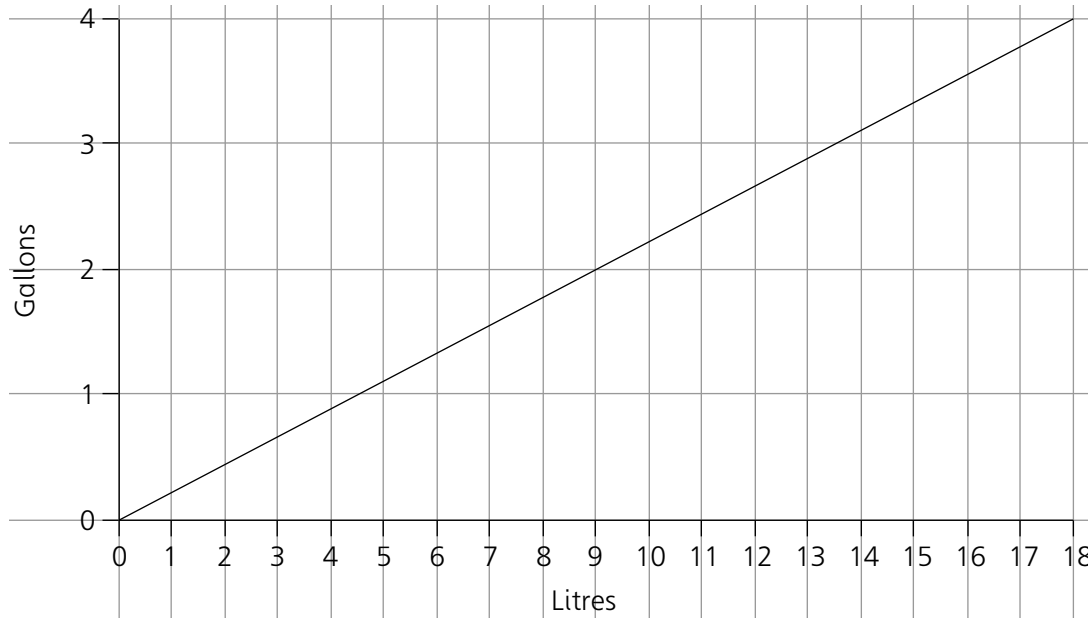
Minimum mark	10	8	6	4	
Circle grade	A	B	C	D	E

12

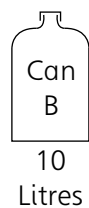
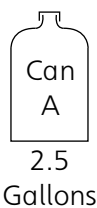
24 Using and drawing conclusions from graphs – 1



This is a conversion graph for changing gallons into litres:



- 1 Mr Wright puts 3 gallons of petrol into his car.
How many litres is this? 1.....
- 2 Mrs Read bought 18 litres of petrol. How many gallons was this? 2.....
- 3 John bought a one gallon can of oil. How many litres was this? 3.....
- 4 The petrol tank of a lorry holds 20 gallons.
How many litres is this? 4.....
- 5 A petrol tanker delivered 4000 gallons of petrol to a filling station. How many litres is this? 5.....
- 6 A tank holds 135 litres of water. How many gallons is this? 6.....
- 7 A ship holds 10 000 gallons of oil.
How many litres is this? 7.....
- 8 Which can holds more?
8 Can.....



Minimum mark

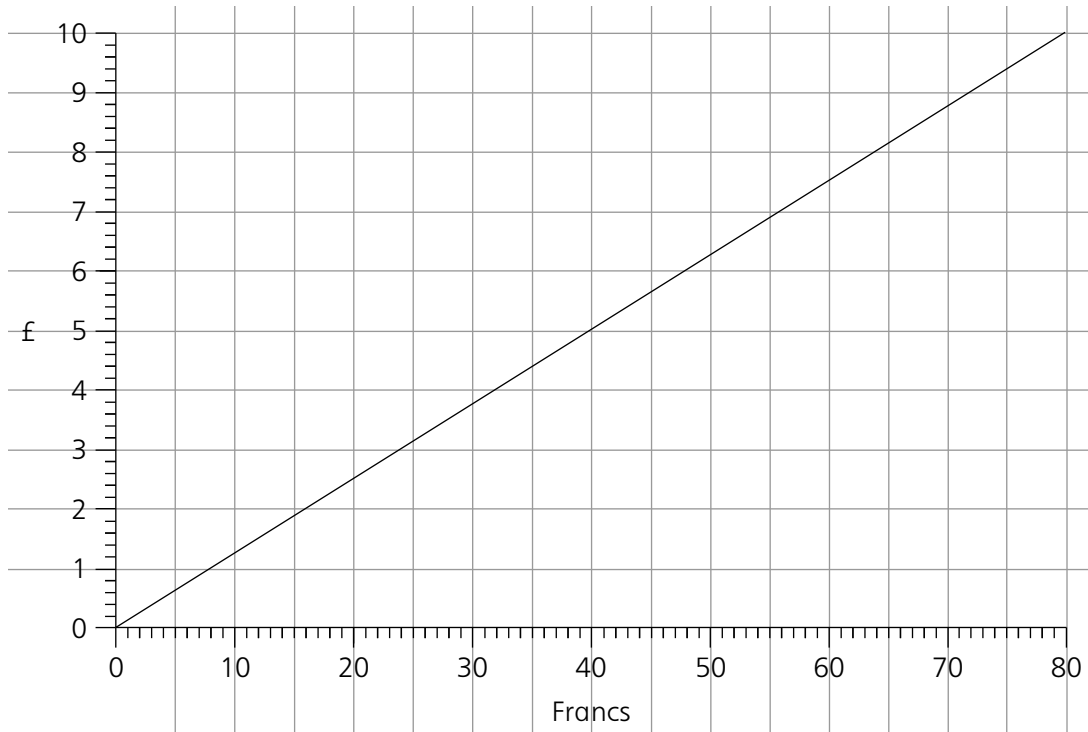
7	5	4	2	
A	B	C	D	E

Circle grade

8

25 Using and drawing conclusions from graphs – 2

This is a conversion graph for changing £ into Francs:



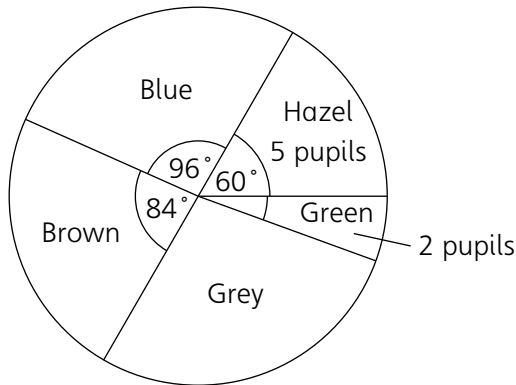
- 1 How many Francs will I receive for £5? 1.....
- 2 How many Francs will I receive for £2? 2.....
- 3 How many £ will I receive for 80 Francs? 3.....
- 4 How many £ will I receive for 50 Francs? 4.....
- 5 How many Francs will I receive for £500? 5.....
- 6 How many Francs will I receive for £750? 6.....
- 7 How many £ will I receive for 200 Francs? 7.....
- 8 How many £ will I receive for 600 Francs? 8.....

Minimum mark	7	5	4	2	
Circle grade	A	B	C	D	E

_____ / 8


26 Understanding pie charts – 1

1 This pie chart shows the eye colours of pupils in a class:



- a How many pupils had blue eyes? 1a
- b How many pupils had brown eyes? 1b
- c What is the angle for green eyes? 1c
- d What is the angle for grey eyes? 1d
- e How many pupils had grey eyes? 1e
- f How many pupils took part in the survey? 1f

2 This pie chart shows the favourite subjects of some children:




- a How many pupils chose maths? 2a
- b What is the angle for history? 2b
- c What is the angle for science? 2c
- d What is the angle for PE? 2d
- e How many pupils chose PE? 2e
- f How many pupils took part in the survey? 2f

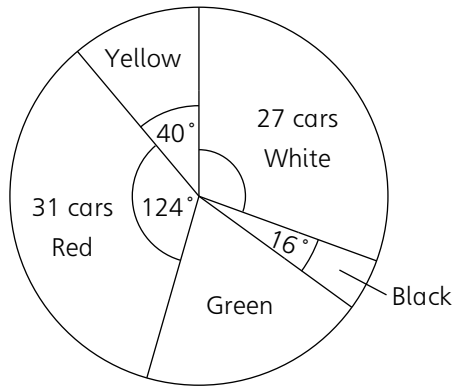
Minimum mark	10	8	6	4	
Circle grade	A	B	C	D	E

12

27 Understanding pie charts – 2

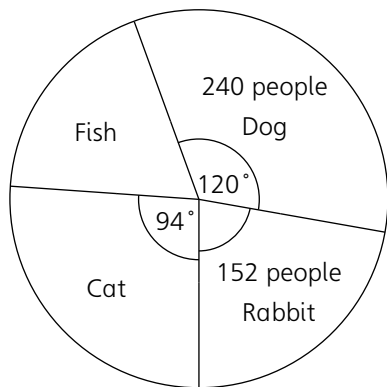


1 This pie chart shows the colours of cars in a car park:



- a How many cars were yellow? 1a
- b How many cars were black? 1b.....
- c What is the angle for white? 1c.....
- d How many cars were green? 1d
- e What is the angle for green? 1e.....
- f How many cars were in the car park? 1f

2 This pie chart shows the favourite pets of people in a survey:




- a How many people chose cats? 2a
- b What is the angle for rabbit? 2b.....
- c How many people chose fish? 2c.....
- d What is the angle for fish? 2d
- e Which is the favourite pet? 2e.....
- f How many people took part in the survey? 2f



Minimum mark	10	8	6	4	
Circle grade	A	B	C	D	E

 12

28 The probability scale – 1





Each box contains black and white counters.
A girl is blindfolded and chooses one disc from each box. Using an arrow, indicate the probability of choosing:



- a A black disc
- b A white disc.

B = Black
W = White



1





2





3





4



5



6




Minimum mark

10	8	6	4	
A	B	C	D	E

Circle grade


12

29 The probability scale – 2

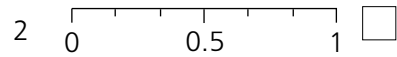


Show the probability of the following events on the probability scales using an arrow:


1 Throwing a six sided die and getting a 3




2 Throwing a six sided die and getting a 6



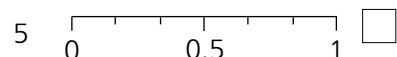
3 Throwing a six sided die and getting a 7



4 Throwing a six sided die and getting an odd number




5 Throwing a six sided die and getting an even number




6 Throwing a six sided die and getting 5 or more



7 Throwing a six sided die and getting less than 6




8 Throwing a six sided die and getting 3 or less




9 Throwing a six sided die and getting 3 or more




10 Throwing a six sided die and getting 1 or 2



11 Tossing a coin and landing on tails




12 Tossing a coin and landing on its edge



Minimum mark	10	8	6	4	
Circle grade	A	B	C	D	E

_____ / 12

30 Justifying probabilities



1 Alan, Barry and Chris compete in a race. There are six different possible results. List all of the possible results. Two have been done for you.

1. A B C.....
 A C B.....

2 Anna, Beverley and Carol compete in a race. Anna beats Carol. List all of the possible results

2.....

3 The probability of a man wearing glasses is $\frac{1}{5}$
 In a group of 2000 men, how many would you expect:

a To wear glasses? 3a
 b Not to wear glasses? 3b.....

4 Two coins are tossed. List all of the different ways they can land. Use H for heads and T for tails.

4.....

How would you decide the probability of each of the following? Choose A equally likely outcomes, or B experimental evidence. Write A or B on the answer line.

5 A die is thrown. What proportion of times is 6 scored? 5.....
 6 One hundred drawing-pins are dropped onto the floor. What proportion land point up? 6.....
 7 Anna and Karen compete in some cycle races. What proportion of the time will Anna win? 7.....



Minimum mark	7	5	4	2		_____
Circle grade	A	B	C	D	E	8